

SPOOKY MATH

Instructions: Look at the key, then resolve the spooky maths problems!








1.  +  =

2.  +  =

3.  +  =

4.  -  =

5.  -  -  =

6.  -  -  =

7.  +  -  +  =

8.  +  +  -  =

